



 ?
Quanti sono?

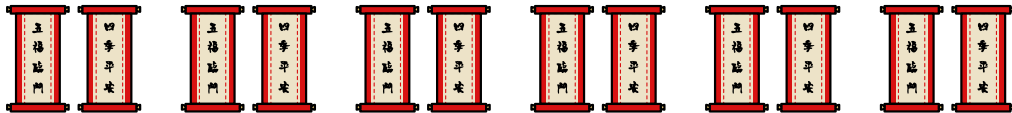


1	2	3	4	5	6	7	8	9	10
---	---	---	---	---	---	---	---	---	----




 Quanti sono?







1	2	3	4	5	6	7	8	9	10
---	---	---	---	---	---	---	---	---	----

 ?
Quanti sono?



1	2	3	4	5	6	7	8	9	10
---	---	---	---	---	---	---	---	---	----